




# Goldilocks and the Three Bears Story Map


Cut out the different events that happen in the story of Goldilocks and place them in order.







# RAINBOW to 20




$\begin{array}{r} + \\ \hline \end{array} = 20$   
 $\begin{array}{r} + \\ \hline \end{array} = 20$   
 $\begin{array}{r} + \\ \hline \end{array} = 20$   
 $\begin{array}{r} + \\ \hline \end{array} = 20$   
 $\begin{array}{r} + \\ \hline \end{array} = 20$   
 $\begin{array}{r} + \\ \hline \end{array} = 20$   
 $\begin{array}{r} + \\ \hline \end{array} = 20$   
 $\begin{array}{r} + \\ \hline \end{array} = 20$   
 $\begin{array}{r} + \\ \hline \end{array} = 20$   
 $\begin{array}{r} + \\ \hline \end{array} = 20$   
 $\begin{array}{r} + \\ \hline \end{array} = 20$



$\begin{array}{r} + \\ \hline \end{array} = 20$   
 $\begin{array}{r} + \\ \hline \end{array} = 20$   
 $\begin{array}{r} + \\ \hline \end{array} = 20$   
 $\begin{array}{r} + \\ \hline \end{array} = 20$   
 $\begin{array}{r} + \\ \hline \end{array} = 20$   
 $\begin{array}{r} + \\ \hline \end{array} = 20$   
 $\begin{array}{r} + \\ \hline \end{array} = 20$   
 $\begin{array}{r} + \\ \hline \end{array} = 20$   
 $\begin{array}{r} + \\ \hline \end{array} = 20$   
 $\begin{array}{r} + \\ \hline \end{array} = 20$   
 $\begin{array}{r} + \\ \hline \end{array} = 20$

# My Alphabet Mat

a



b




c



d



e



f



g



h



i



j



k



l



m



n



o



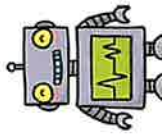
p



q




r



s



t



u



v



w



x



y




z



# Things That Make Me Happy

What makes you happy? Have a think and talk about your ideas with a grown-up and your friends. Draw an idea into each thought bubble – you can draw a smiley, happy picture of you too!



# Bean Bag Balance Challenge

For this challenge, you need to stand on one leg and balance a bean bag on the knee of the opposite leg.

You will need to concentrate hard and try to balance for three minutes.



Name: \_\_\_\_\_


## Q. Reading Comprehension

I have a friend.

His name is Tim.

Tim has a remote control car.

We play with the car.



1. I have \_\_\_\_\_.

- a) a car.
- b) a friend.
- c) a pen.

2. His name is \_\_\_\_\_.

- a) Tim.
- b) Tom.
- c) Ben.


3. Tim has \_\_\_\_\_.

- a) a car.
- b) a friend.
- c) a pen.

Name: \_\_\_\_\_

## Q. Reading Comprehension

I have a pet cat.  
his name is Tom.  
Tom is a white cat.  
He likes to eat fishes.



1. I have \_\_\_\_\_.

- a) a pet cat.
- b) a pet rat.
- c) a pet dog.

2. His name is \_\_\_\_\_.

- a) Tim.
- b) Tom.
- c) Ben.

3. Tom is \_\_\_\_\_.

- a) a black cat
- b) a white cat.
- c) a gray cat.



# Number Line Subtraction

Example:

$10 - 5 = 5$	
--------------	--

$20 - 3 =$	
$9 - 4 =$	
$18 - 2 =$	
$10 - 6 =$	
$7 - 3 =$	
$2 - 2 =$	
$3 - 1 =$	
$11 - 8 =$	
$15 - 3 =$	
$6 - 1 =$	

# WANTED



Name:

Last Seen:

Crime:

Eye Colour:

Hair Colour:


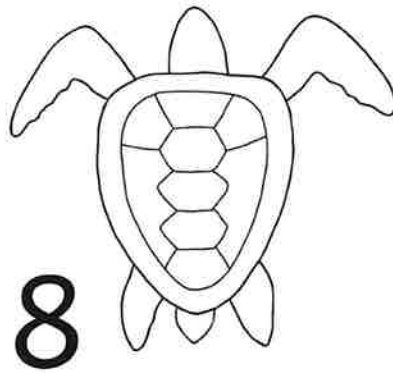
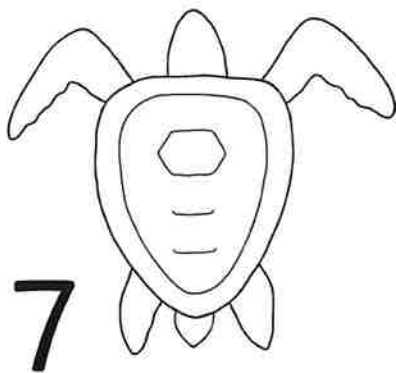
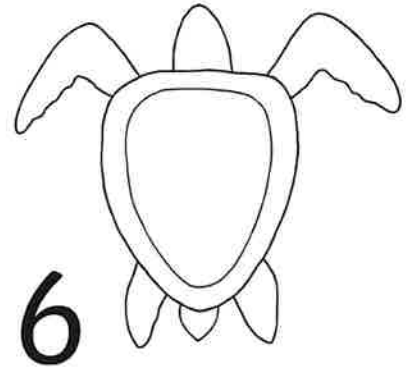
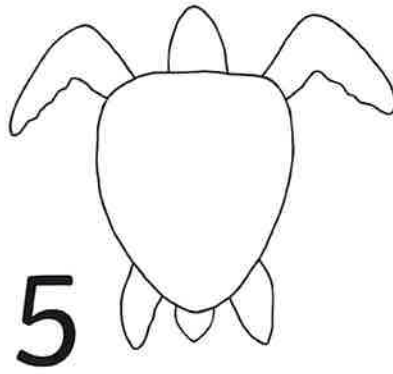
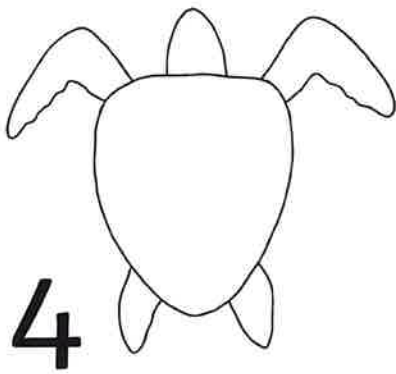
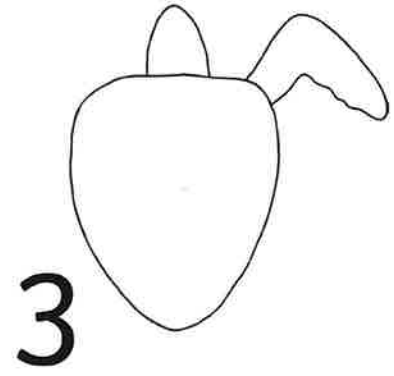
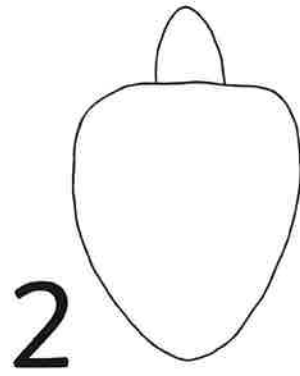

Clothes:

# Drawing Challenge

For this challenge you need to create a picture of a turtle. Follow these steps exactly, so your turtle looks like the one below.

You will need to concentrate hard.

You have 3 minutes.





Goldilocks  
5 Buttercup Lane  
The Village

Dear Three Bears,

---

---

---

---

---

from Goldilocks xxx



# I Spy with My Little Eye



# I Spy with My Little Eye Checklist

Tick the box when you find the matching picture.

spoon



hand



balloon



mouse




sock



teapot



envelope



fairy



mouth



beach ball



bee



carrot



shorts



tractor



dog



lighthouse



snail



queen



panda



jam



lion




bath



umbrella



cow



flag



moon



clock



# I Am an Amazing Person!

Read and finish the sentences in the balloons below.

