



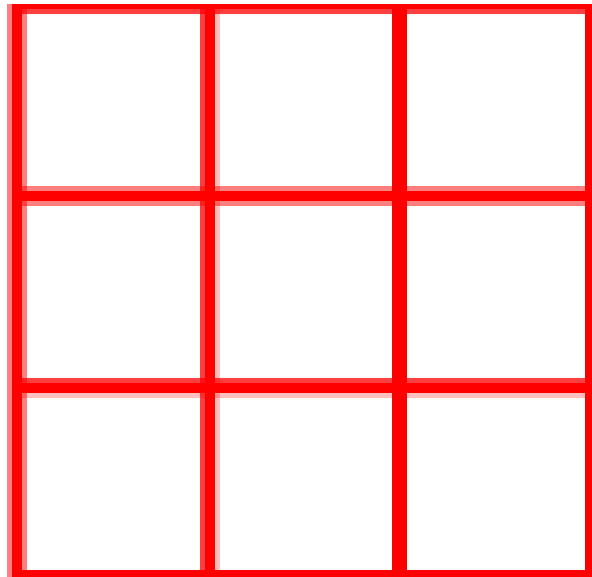

# Ladybird Box

Age 5 to 11

Some toy ladybirds are kept in this box which has 9 little square compartments.



Can you place six ladybirds into the box so that there are just two ladybirds in every column and every row?



Remember, you can draw the grid in your home learning pack or on a piece of paper and use anything you want to represent the ladybirds.

Or try this interactive version online by following this link:

<https://nrich.maths.org/144>