


1

Perimeter

1.

8 cm



8 cm

2.




6 cm

6 cm

3.

12 cm



9 cm

4.

10 cm



10 cm

5.

14 cm



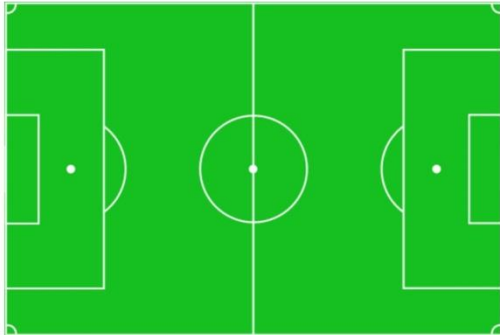
8 cm



2

Perimeter

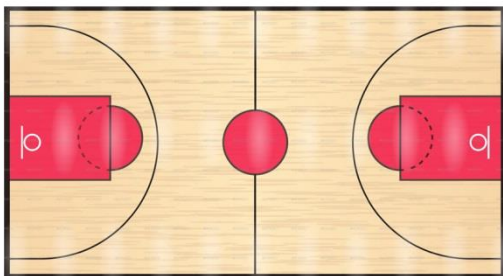
13 m



9 m

The perimeter of the football pitch is _____


11 m



8 m

The perimeter of the basketball court is _____

12 m



15 m

The perimeter of the swimming pool is _____

