

## Learn and revise

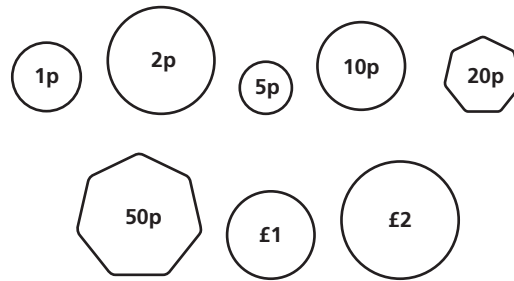
These are the coins we use:

There are 100 pence in £1.

£1 = 100p

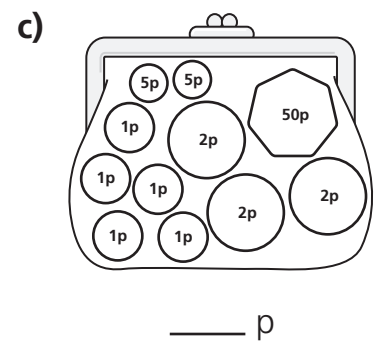
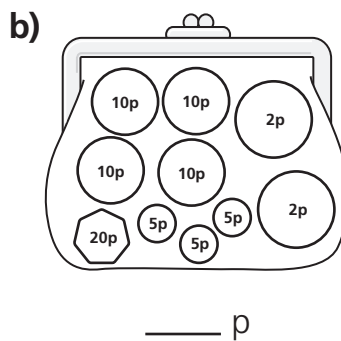
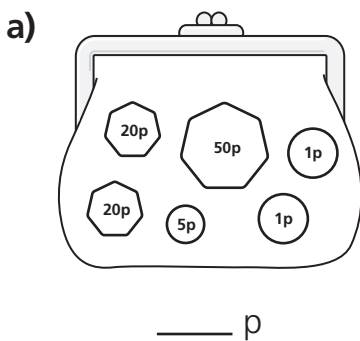
£2 = 200p

£1 and 50p = 150p



## Practice activities

1. How much money is in each purse?



2. Answer these.

a) A pencil costs 50p and you use four coins to pay for it. Which coins could you use?

\_\_\_\_\_

b) A ball costs 80p and you have a 20p coin in your hand. You use two more coins to make the total. Which coins did you use?

\_\_\_\_\_

c) A balloon costs 75p and you have a 10p coin in your hand. You use five more coins to make the total. Which coins did you use?

\_\_\_\_\_

3. Make up the following amounts with the fewest number of coins.

a) 85p \_\_\_\_\_

b) 124p \_\_\_\_\_

c) 99p \_\_\_\_\_