

Year 4: Day 2

Literacy - WALT - Can I use and identify fronted adverbial?

What's a fronted adverbial? A fronted adverbial is when the adverbial phrase is at the **front** (or start) of the sentence, **before** the verb. For example: Earlier today, Ian ate a banana.

Here, 'earlier today' is a **fronted adverbial** as it adds detail about when Ian ate the banana at the **front** of the sentence, before the verb 'ate'.

Watch the video below to find out more. Remember you need a comma after the fronted adverbial.

<https://www.bbc.co.uk/bitesize/articles/z62ckmn>

Work your way through the activities on the website.



Underline the fronted adverbials and put the commas in the correct places in the sentences below:

- 1) Slowly Lucy stepped into the wardrobe.
- 2) In the distance Lucy saw the glimmering light of the lamppost.
- 3) Cautiously Lucy entered the wardrobe.
- 4) Softly fragile snowflakes fell from the sky and covered the ground.
- 5) Eventually Lucy reached the back of the wardrobe.
- 6) Surrounding her were hundreds of trees covered in a blanket of snow.

Now, use the sheet to write sentences of your own. See Literacy Day 2.

WALT: Can I reason and problem-solving with addition?




When we reason and problem-solve it is important to read the question carefully. We also answer using full sentences.

Try these questions first:

3. Michael went shopping with his friend, Rachael. Michael bought a new fridge for £139 and a washing machine for £565. Rachael bought an oven for £189 and a dryer for £699. a) How much did Michael spend? b) How much did Rachael spend? c) How much did they both spend in total?	7. Willoughby primary school are going on a trip to see the pantomime. There are 189 children going, along with 39 teachers and 26 parents. a) How many are going altogether? A further 375 people are coming from other schools. b) How many people in total will be watching the pantomime?
------------------------------------------------------------------------------------------------------------------------------------------------------------------------------------------------------------------------------------------------------------------------------------------------------------------	---------------------------------------------------------------------------------------------------------------------------------------------------------------------------------------------------------------------------------------------------------------------------------------------------------------------------

- 1) a) How might you work out Michael's total?
b) Now work out Rachel's total.
c) Then add the two answers together.
- 2) a) How many people are going on the pantomime trip altogether?
b) Now add the extra people onto the total.

Now have a go at these questions:

2. A football stadium holds 6977 people. Andrew says,  Is he correct? Explain your answer.	3679 people have already entered. 3290 people are just entering. That means the stadium is full.	6. Two children completed the following calculation: $4626 + 4485$ My answer is 89021  Sophie Dan  My answer is 9911 Both of them have made mistakes. Calculate what the answer should have been. What mistakes did they make?
---------------------------------------------------------------------------------------------------------------------------------------------------------------------------------------------	-----------------------------------------------------------------------------------------------------	------------------------------------------------------------------------------------------------------------------------------------------------------------------------------------------------------------------------------------------------------------------------------------------------------------------------------------------------------------------------------------------------------------------------------------------

- 3) Work out if Andrew's calculations are correct. Then explain if he is correct or incorrect and explain what he did.
- 4) Explain what mistake Sophie has made. Then explain Dan's mistake. It might be easier to solve the problem yourself first then you might spot their mistake.

Now complete the questions on the sheet.

If you need help with your home learning ask an adult. Or an adult can email info@scraptoftvalley.leicester.sch.uk to ask about home learning if needed.

Physical Education

Fitness Bingo

See how many of the stretches, balances and jumps you can do. Record the number on your sheet.

Remember to make sure you have enough space to do each activity safely.



treadmill




tip-toe walking




skipping track



march



arm circles



crab walk

Handwriting

Copy these words carefully in your book using joined handwriting.

- suddenly
- because
- clothes
- through
- queen
- goes

Times tables

Complete these times table questions in your book:

$2 \times 4 =$

$3 \times 2 =$

$4 \times 5 =$

$4 \times 3 =$

$3 \times 4 =$

$3 \times 1 =$

$1 \times 4 =$

$3 \times 3 =$

$6 \times 4 =$

$5 \times 3 =$

$4 \times 7 =$

$3 \times 8 =$

$12 \times 4 =$

$3 \times 6 =$

$10 \times 4 =$

$10 \times 3 =$

$4 \times 9 =$

$9 \times 3 =$

$4 \times 4 =$

$3 \times 7 =$

$4 \times 11 =$

$11 \times 3 =$

$8 \times 4 =$

$12 \times 3 =$

$0 \times 4 =$

$0 \times 3 =$

Reading

Read your reading book to an adult for 15 minutes.

Can you tell them what has happened in the book so far in your own words? (summarise the key points)

If you need help with your home learning ask an adult. Or an adult can email info@scraptoftvalley.leicester.sch.uk to ask about home learning if needed.