

3 times table

Name: _____




Exercise 1:

Draw a line connecting the multiplication expression with the correct product.

2×3	27	
1×3		15
5×3	30	
8×3		24
4×3	3	
9×3		18
3×3	12	
6×3		9
7×3	6	
10×3		21

Exercise 2:

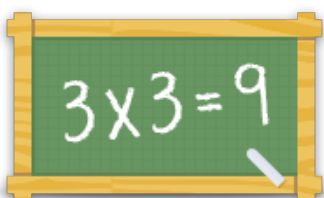
Fill in the missing number.

- a)  $\times 3 = 15$ b)  $\times 3 = 36$ c)  $\times 3 = 27$

Exercise 3:

Fill in the correct product.

- a) $4 \times 3 =$ _____ b) $1 \times 3 =$ _____ c) $6 \times 3 =$ _____
d) $5 \times 3 =$ _____ e) $2 \times 3 =$ _____ f) $7 \times 3 =$ _____



For more worksheets, games and exercises:
www.timestables.co.uk