

Monday

Literacy

Log onto Purple Mash. Have a go at the spelling Quiz!



Numeracy

Can you use the number flower to fill in the missing number facts?



$1 \times 3 = \underline{\quad}$ $\underline{\quad} \times 3 = 30$
 $2 \times \underline{\quad} = 6$ $8 \times \underline{\quad} = 24$
 $\underline{\quad} = 3 \times 3$ $6 \times 3 = \underline{\quad}$
 $9 \times 3 = \underline{\quad}$ $21 = \underline{\quad} \times 3$

Create your own number flower for the 4 and 8 times table.

Reading

Read your home reader and or library book this week. Fill out your reading chart.

Create a storyboard to re-tell the story in your book. You could do as few as three boxes in your storyboard or as many as eight.

Tuesday

Literacy

Present Perfect and Simple Past Verb Tenses

Circle the correct word or phrase from the brackets to complete each sentence.

e.g. I ((have) / has) been to school today.

1. My friends and I (has / have) made a den in the garden.
2. The film (has / have) begun so come and sit down.
3. What (has / have) you got there?
4. (Has / Have) you ever been to France?
5. Mum and Dad (has / have) gone to the cinema tonight.
6. The fox (has / have) eaten everything out of the bin.
7. James (has / have) got blonde hair.

Numeracy

Sort these statements into always, sometimes or never.

- When counting in hundreds, the ones column always changes.
- When counting in hundreds, the hundreds column changes.
- To count in hundreds we use 3-digit numbers.

French

See sheet attached.

Wednesday

Literacy

Choose 10 words from your Year 3 spelling list.

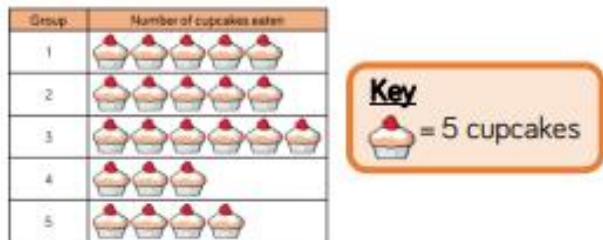
Silly Sentences

Write silly sentences using a spelling word in each sentence. Please underline your spelling words! Write neatly!

Example: My dog wears a blue and purple dress when he takes a bath.

Numeracy

Answer the questions using the pictogram.



- 1) How many cupcakes did group 5 eat?
- 2) Which group ate the most cupcakes?
- 3) How many cupcakes did all the groups eat altogether?
- 4) Group 2 gave 5 cupcakes to group 1. How many do group 1 have now?

Well-being

Growing

Like cooking, getting into the garden is a great way to chill out. Being outside, we can connect to nature, hang out with birds and spot new bugs and plants.

Set up a veggie patch or a little garden or grow some plants inside on a windowsill. Plant some seeds, watch them grow, check on them every day. Write notes or take a picture to keep track of how things are doing.



Thursday

Literacy

Story Settings Description



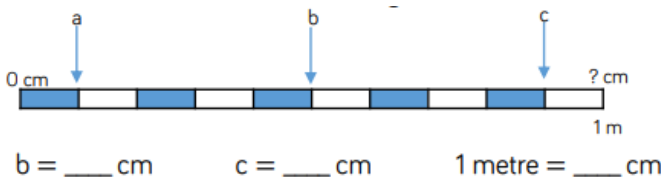
Key Words

- beautiful fantastic
- lovely green leafy
- noisy crowded lively
- fun entertaining busy
- enjoyable relaxing
- wonderful pleasant

Can you write a paragraph about this setting?

Numeracy

If a = 10cm, calculate the missing measurements



Creative

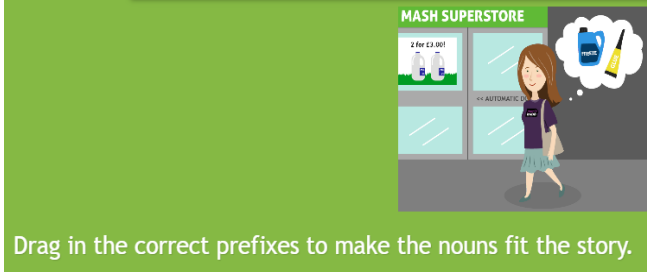
Chances are you, got a slew of extra toilet paper in the house. When the time comes, why not upcycle those empty tubes into works of art? From crafting your favourite Star Wars characters to flying fish, the possibilities are endless when you've got a stash of toilet paper rolls on hand!



<https://redtri.com/things-to-make-with-a-toilet-paper-roll/slide/3>

Literacy

Log into Purple Mash. Can you complete the Superhero Shopping Trip challenge?

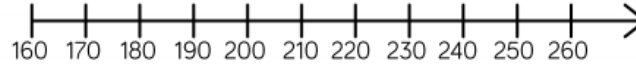


Drag in the correct prefixes to make the nouns fit the story.

Numeracy

Can you use the number line to calculate:

- 1) $250 - 70 =$
- 2) $260 - 90 =$
- 3) $200 - 20 =$
- 4) $210 - 50 =$
- 5) $225 - 40 =$

**Computing**

<https://www.safekids.com/quiz/>

Have a go at the above quiz on internet safety. Then try to create your own quiz for a friend or family member to complete.