









<p>Monday</p>	<p>Literacy</p> <h3 style="text-align: center;">Story Settings Description</h3> <div style="display: flex; justify-content: space-around;">  <div style="border: 1px solid black; padding: 5px;"> <p>Key Words</p> <p>beautiful unsettling giant calm wild lovely dangerous fantastic scorching freezing windy spooky magnificent quiet noisy tense lonely</p> </div> </div> <p>Can you write a paragraph about this setting?</p>	<p>Numeracy</p> <p>Can you use your times tables to work out the following word problems?</p> <ol style="list-style-type: none"> 1. A teacher asks some children to arrange chairs into 12 rows of 4. How many chairs will be laid out? 2. Sweets are sold in packs of 3. Jim has 7 packs. How many sweets does he have altogether? 3. A photo album has 9 pages. Each page holds 8 photos. How many photos are there in the whole album? 	<p>Reading</p> <p>Read the story on Epic books and then take the quiz!</p>  <p style="text-align: center;">Big Bear Hug</p>
<p>Tuesday</p>	<p>Literacy</p> <p>Log onto Purple Mash. Have a go at the Year 3 spellings quiz.</p> 	<p>Numeracy</p> <p>Scraptoft Valley Primary School have £5.00 to spend on fruit. What fruits can they buy with the least amount of change left over?</p> <div style="display: flex; flex-wrap: wrap; justify-content: space-around;"> <div style="text-align: center;">  <p>banana: 60p</p> </div> <div style="text-align: center;">  <p>mango: £2 and 25p</p> </div> <div style="text-align: center;">  <p>strawberry: 86p</p> </div> <div style="text-align: center;">  <p>melon: £1 and 90p</p> </div> </div>	<p>French</p> <p>See attached sheet.</p>

Wednesday

Literacy

Read this text on Epic Books and then challenge yourself to try the quiz. Can you write some sentences in your book using contractions?



Numeracy

Can you add < or > in the circles below?

$$487 + 368 \quad \bigcirc \quad 487 + 468$$

$$326 + 258 \quad \bigcirc \quad 325 + 259$$

Well-being

Try this mindfulness challenge:

Listen carefully with your eyes closed to any sounds you can hear. After one minute, open your eyes and write down everything you heard.

Thursday

Literacy

Can you use commas in a list to separate the items?

1. Thomas thought the beef and the stir-fry and the chicken looked delicious.
2. Susie and Martin and Hannah and Tom went Swimming.
3. Mark's bag was full of clothes and food and books.
4. The Javelin and the triathlon and the hockey were still to come.
5. On safari we saw lions and tigers and giraffes and a snake.
6. I made the card using brown paper and glue and glitter.

Numeracy

Can you put the cards in the correct order?

Start at $18 - 3$
Calculate the answer to this calculation.
The next card needs to be begin with this answer.

18 - 3	21 ÷ 3	15 ÷ 3	8 - 5
5 × 2	10 × 2	20 + 1	4 × 2
14 - 2	12 ÷ 3	3 × 6	7 × 2

Creative

Create your own 'Stay Safe' or 'Thank you NHS' art. There is a Stay Safe Rainbow attached too.



Literacy

Choose 10 words from your Year 3 spelling list.

Make and practice with flashcards.



Put the word on one side and definition (meaning) on the other.

Numeracy

Log onto Purple Mash. Can you interpret the bar charts?

Interpreting Block Graphs

Interpret the information on the block graph.

Computing

Have a look at the internet safety Power Point attached. Buddy the Dog.

