

Monday

**Literacy**


These sentences are sick and need your help to get better!


There is a house. It is in the rainforest. There are plants. There are flowers.





Can you use noun phrases to describe the setting?


**Numeracy**

I can write multiplication statements using the multiplication and equal signs.  
For each image, write the multiplication fact shown.  
For example:   $2 \times 3 = 6$   
(number of groups) (group size)

   $\times$   =


   $\times$   =

   $\times$   =

   $\times$   =

**Reading**

Log into Epic books and read the following text.  
Can you take the quiz?



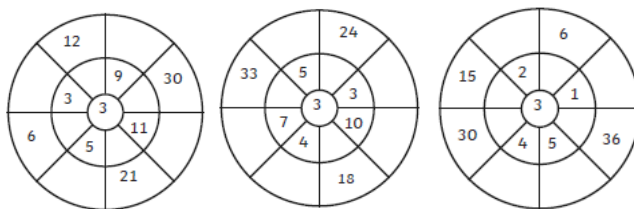
Tuesday

**Literacy**

Complete the table below by adding a suffix -ly to each adjective to make an adverb.

Adjective		Adverb
happy	→	
simple	→	
dramatic	→	
gentle	→	
slow	→	

**Numeracy**



Can you complete the following 3 times tables wheels?

**French**

Read the French PowerPoint on the school website and complete the task

Wednesday

**Literacy**

Can you describe the following spooky setting using your senses?



Where is the setting located?

What might you find here?

What does it smell like? What can you see?

What can you hear?

Can you use a simile?

**Numeracy**

Calculate the missing digits in these calculations.

1. 
$$\begin{array}{r} \square 2 \\ \times 2 \\ \hline 6 4 \end{array}$$

2. 
$$\begin{array}{r} 2 \square \\ \times 4 \\ \hline 1 1 6 \end{array}$$

3. 
$$\begin{array}{r} \square 6 \\ \times 4 \\ \hline 2 2 4 \end{array}$$

4. 
$$\begin{array}{r} \square 4 \\ \times 4 \\ \hline 1 7 6 \end{array}$$


Explain the mistake.

	H	T	O
		2	7
x			3
	6	2	1

**Reading**

Log into Epic books and read the following text.

Can you take the quiz?



Thursday

**Literacy**

Choose 10 words from your Year 3 spelling list.

Create your own word search with your spellings. Show the answers to your puzzle in a different colour.



**Numeracy**

Complete the following division questions using the bus-stop method.

1. 
$$\begin{array}{r} \square \square \square \\ 7 \overline{) 777} \end{array}$$

2. 
$$\begin{array}{r} \square \square \square \\ 7 \overline{) 98} \end{array}$$

3. 
$$\begin{array}{r} \square \square \square \\ 4 \overline{) 64} \end{array}$$

**Creative**

Can you make a salt-dough family handprint?

With an adult, mix 2 cups of all-purpose flour and 1 cup of salt together in a bowl. Pour in 1 cup of water, adding a little at a time and mixing as you go. Once mixed together, take the salt dough out of your mixing bowl and knead it. Roll it out and then press your hands into the dough. Bake the dough at 100 degrees for 3 hours. Let it cool before painting!



Literacy

# Grammar and Punctuation

Where should the apostrophe be in these sentences?

The teacher called Nazeems name.

"Why cant I go to the fair?" I asked Mum.

The dog wouldnt come back when we whistled.

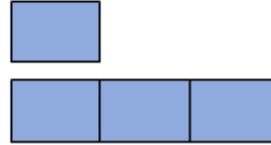
Grandmas house was a long way from our house.

Numeracy

In a playground there are 3 times as many girls as boys.

There are 30 girls.

Label and complete the bar model to help you work out how many boys there are in the playground.

Well-being

Yoga Cards

## Chair Pose - Utkatasana

Benefits

Strengthens legs, stretches shoulders and chest.

- 1 Start in mountain pose.
- 2 Exhale, and bend your knees as if you were sitting in a chair.
- 3 Reach your arms towards the ceiling, with your palms facing each other.
- 4 Hold this pose and breathe.

