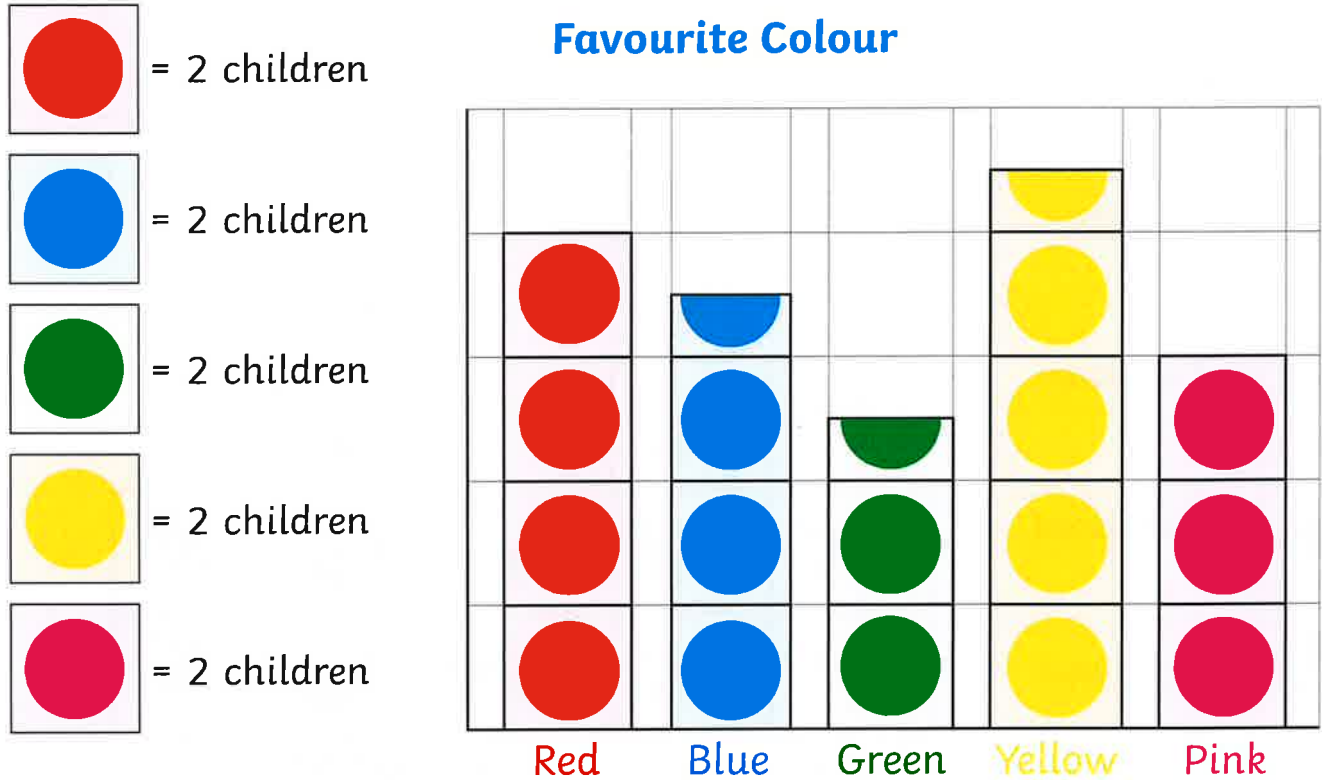


Interpreting Scaled Pictograms

Learning Objective: I can interpret scaled pictograms



Answer the following questions.

What is the least favourite colour? _____

How many children chose yellow as their favourite colour? _____

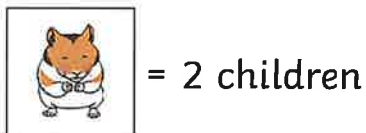
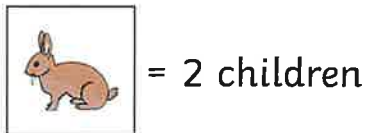
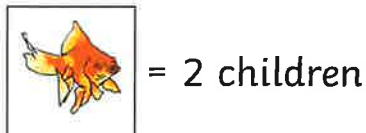
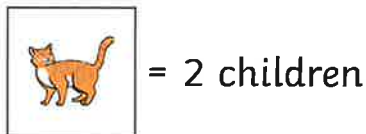
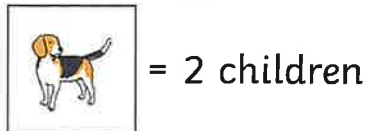
How many fewer children chose green than blue as their favourite colour? _____

How many children chose pink and red as their favourite colour? _____

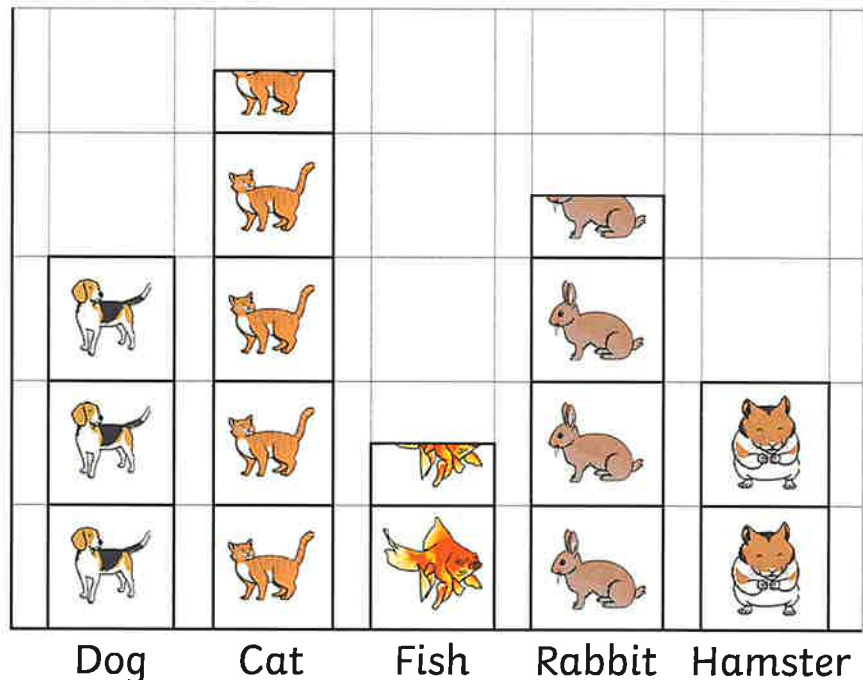
Write your own questions for a friend.

Interpreting Scaled Pictograms

Learning Objective: I can interpret scaled pictograms



Class Pets



Answer the following questions.

Which is the most common pet? _____

How many pets are there in class? _____

How many more rabbits than hamsters are there? _____

How many fewer dogs than cats are there? _____

Write your own questions for a friend.



Joining the Letter 'd'

Continue each line using diagonal joins.

Take extra care when joining to an anticlockwise letter.

dd

do

da

Practise joining the letters in the prefixes 'dis-' and 'de-'.

dis

de

Use the interactive spinner to create words that have the prefix 'dis-' or 'de-'.

Write them here in your neatest, joined style:

Add either 'da' or 'do' to these words. What words have you created?

calen__r

a__rable

__ngerous

mid__y

__ubt

king__m

Day 4 Challenge

| | | |
|-----------------|-----------------|-----------------|
| $8 \times 3 =$ | $9 \times 4 =$ | $8 \times 4 =$ |
| $6 \times 4 =$ | $0 \times 8 =$ | $3 \times 3 =$ |
| $11 \times 4 =$ | $6 \times 8 =$ | $1 \times 4 =$ |
| $3 \times 3 =$ | $12 \times 3 =$ | $12 \times 8 =$ |
| $6 \times 3 =$ | $4 \times 4 =$ | $0 \times 4 =$ |
| $2 \times 8 =$ | $7 \times 4 =$ | $5 \times 8 =$ |
| $5 \times 4 =$ | $11 \times 4 =$ | $3 \times 4 =$ |
| $3 \times 8 =$ | $3 \times 8 =$ | $2 \times 3 =$ |

My score:

24