

WALT: Can I punctuate a passage from an adventure story correctly?

traction man is zooming down to planet duvet

the farm animals are being held captive by the evil  
pillows

traction man jumps on the pillows he is wearing his  
rocket boots

ow they cry and lumber away

the farm animals rejoice hooray for traction man

**Challenge! Make up a sentence with ellipsis in it!**

Day 5 Week 5

Choose the word that is closest in meaning to:

Word				Picture
Combat	To fight	To leave alone	To run	
Volunteer	To offer to do a job	To cry	To work for money	
Captive	A freed person	Keeping someone as a prisoner	A type of bone	
Poisonous	deadly	relaxing	happy	
Repay	To never pay	To pay again	To sit	

Do the word activity first then do all the pictures once you have finished.

## WALT: Can I give change?

Lesson 5 Week 5

## Starter activity!

If you bought both of these, roughly (guess) what change would you get from a £10 note?

Choose A, B or C.

£2 and 69p      £3 and 45p

A. £6      B. £4      C. £8

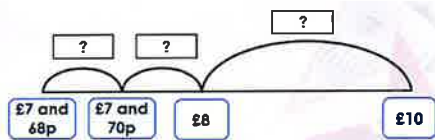
## Try this...

Alice buys a book for £7 and 68p. She pays with a £10 note.

Complete the number line to work out her change.

Remember to go backwards from the £10.

So how much do you need to subtract from £10 to get to £8?



## Can you represent it a different way?

Sophie goes swimming. It costs £3 and 75p. She pays with a £5 note.

What will her change be?

Use the bar model to show what the answer is. You might need to use a different method to work out the answer.

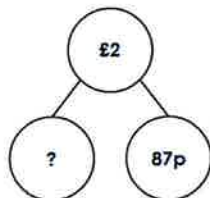


## What about this way?

Joe buys an ice cream for 87p. He pays with a £2 coin. Calculate his change.

Remember the part whole model is showing what it is made up of.

If you need use a different method to work it out make sure you do.



## Try this!

If you buy the ball, what will your change be if you pay with a £10 note?

You can convert this to pence and use the column method for subtraction or use a number line.



## Reasoning and Problem Solving

Andrew buys a chocolate bar which costs £1 and 44p. He gives the shop keeper a £5 note.

Which is correct? Prove it. Show me how you know!

**The change will be:**

A.

**The change will be:**

B.

## Problem Solving

Mohammed bought an ice cream. He paid with a £2 coin.

In his change he got three different silver coins.

How much could the ice cream cost? Show your working out and your ideas!





## Your task!

Complete the worksheets in your pack or on the Teams page or on the school website.

Don't forget to take a phot of your work!

Giving Change	Giving Change	Giving Change	Giving Change
<p>1. Sam buys a packet of sweets for £1 and 44p. He pays with a £5 note. Complete the picture that he gets and the change.</p>	<p>2. Ben buys a game for £1 and 24p. He pays with a £5 note. Complete the picture that he gets and the change.</p>	<p>3. Sam buys a box of chocolates for £1 and 44p. He pays with a £5 note. Complete the picture that he gets and the change.</p>	<p>4. Sam buys a box of chocolates for £1 and 44p. He pays with a £5 note. Complete the picture that he gets and the change.</p>
<p>5. John buys a bag of crisps for £1 and 44p. He pays with a £5 note. What will his change be?</p>	<p>6. George buys a game for £2 and 54p. He pays with a £5 note. What will his change be?</p>	<p>7. Sam buys a box of chocolates for £1 and 44p. He pays with a £5 note. Complete the picture that he gets and the change.</p>	<p>8. Sam buys a box of chocolates for £1 and 44p. He pays with a £5 note. Complete the picture that he gets and the change.</p>

## Giving Change

1a. Josh buys a bar of chocolate that costs £1 and 65p. He gives the shop keeper a £2 coin.

A.



The change will be 45p.

B.



The change will be 35p.



Which is correct? Prove it.

R

## Giving Change

1b. Noah buys a ball that costs £3 and 90p. He gives the shop keeper a £5 note.

A.



The change will be £1 and 10p.

B.



The change will be £2 and 10p.



Which is correct? Prove it.

R

2a. Marcus bought a toy spaceship. He paid with a £5 note. Below is the change he received. How much did the spaceship cost? Show your working.



£\_\_ and \_\_ p



20p

\_\_ p

£\_\_ and \_\_ p

£\_\_ and \_\_ p

£\_\_

PS

2b. Sophie bought a ball. She paid with a £10 note. She got £1 and 30p change. How much did the ball cost? Show your working.



£\_\_ and \_\_ p



£1

\_\_ p

£\_\_ and \_\_ p

£\_\_ and \_\_ p

£\_\_

PS

3a. Amelia bought some biscuits. She paid with a £5 note. Which coins might she get in her change? Give 3 possible answers.



PS

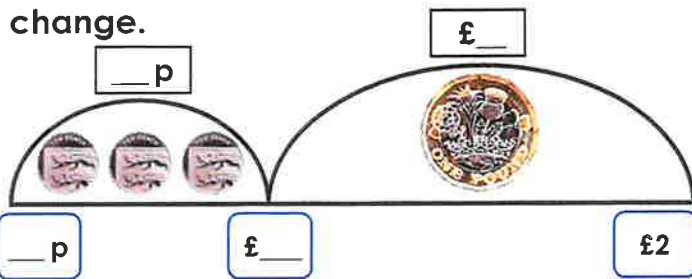
3b. Lily bought a bottle of pop. She paid with a £2 coin. Which coins might she get in her change? Give 3 possible answers.



PS

## Giving Change

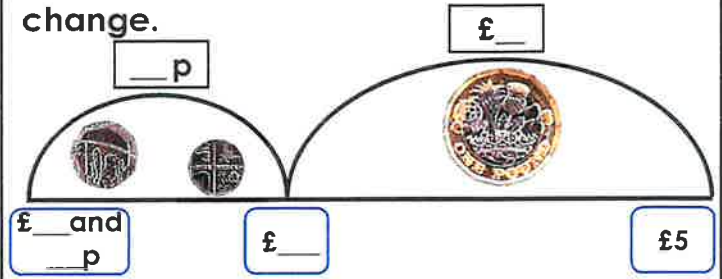
1a. Josh buys a packet of sweets for £1 and 30p. He pays with a £2 coin. Complete the number line to work out his change.



VF

## Giving Change

1b. Ben pays to go swimming. It costs £1 and 25p. He pays with a £5 note. Complete the number line to work out his change.



VF

2a. Jade buys a bag of popcorn for £1 and 45p. She pays with a £2 coin. What will her change be?



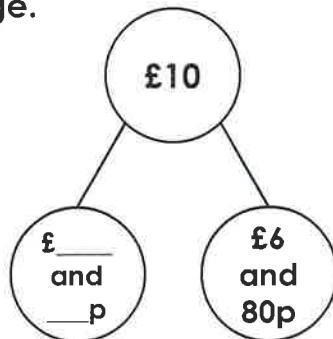
VF

2b. George buys a comic for £2 and 50p. He pays with a £5 note. What will his change be?



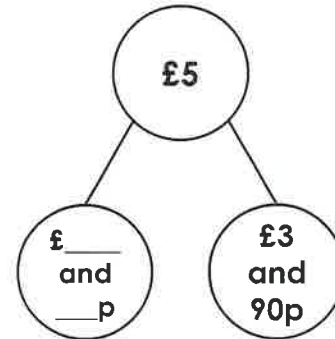
VF

3a. Amy buys a pair of gloves for £6 and 80p. She pays with a £10 note. Calculate her change.



VF

3b. Jack buys a hat for £3 and 90p. He pays with a £5 note. Calculate his change.



VF

4a. If you buy a robot toy, what will your change be if you pay with a £5 note?



£4 and 75p



VF

4b. If you buy a rocking horse, what will your change be if you pay with a £10 note?



£8 and 40p



VF

# Shape Activities

1. Try making some different shapes and holding them for a count of 5 seconds. Start by making the tallest shape you can by stretching your hands up in the air and standing on your tiptoes. Next, try making the widest possible shape you can. Finally, can you make the smallest shape possible by curling yourself up in a ball?



2. Shape Alphabet - How many different letters of the alphabet can you make with your body? If you are finding certain letters difficult, ask a friend or family member to help make the letter shape with you. You could try lower case and upper case letters.




3. Shapes in the Air - Have a go at jumping as high as possible in the air and making different shapes with your body. Can you name the shapes you make?



4. Gymnastics involves great strength, balance and flexibility. You can improve your core strength by trying this fun activity. Pass a beach ball or similar between you and other family members or friends by lying on the floor and using your feet only.



5. Rhythmic Gymnastics involves performing with apparatus – either a ball, ribbon, hoop, clubs or rope. Try doing some rhythmic gymnastics by throwing a ball up into the air and making different shapes with your body before catching it again.



# Shape Activities

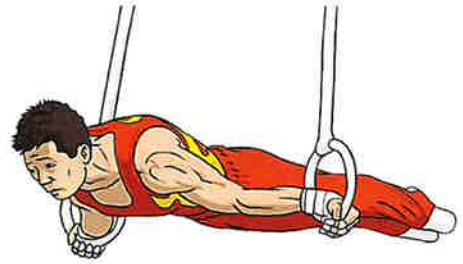
6. There are several different artistic gymnastic events that men and women take part in, such as the beam or the rings. Men compete in 6 events and women compete in 4 – can you find out what they are?

Men

- 1.
- 2.
- 3.
- 4.
- 5.
- 6.

Women

- 1.
- 2.
- 3.
- 4.



1)  $3 \times 4 = \underline{\quad}$

2)  $2 \times 5 = \underline{\quad}$

3)  $4 \times 2 = \underline{\quad}$

4)  $5 \times 10 = \underline{\quad}$

5)  $10 \times 6 = \underline{\quad}$

6)  $4 \times 4 = \underline{\quad}$

7)  $2 \times 7 = \underline{\quad}$

8)  $8 \times 3 = \underline{\quad}$

9)  $5 \times 5 = \underline{\quad}$

10)  $10 \times 3 = \underline{\quad}$

11)  $2 \times 0 = \underline{\quad}$

12)  $4 \times 4 = \underline{\quad}$

13)  $3 \times 1 = \underline{\quad}$

14)  $2 \times 10 = \underline{\quad}$

15)  $7 \times 5 = \underline{\quad}$

16)  $6 \times 2 = \underline{\quad}$

17)  $3 \times 6 = \underline{\quad}$

18)  $7 \times 10 = \underline{\quad}$

19)  $10 \times 4 = \underline{\quad}$

20)  $3 \times 3 = \underline{\quad}$

21)  $2 \times 9 = \underline{\quad}$

22)  $6 \times 5 = \underline{\quad}$

23)  $4 \times 6 = \underline{\quad}$

24)  $3 \times 7 = \underline{\quad}$

25)  $10 \times 10 = \underline{\quad}$

26)  $5 \times 7 = \underline{\quad}$

27)  $8 \times 2 = \underline{\quad}$

28)  $5 \times 3 = \underline{\quad}$

29)  $8 \times 5 = \underline{\quad}$

30)  $10 \times 7 = \underline{\quad}$

31)  $3 \times 9 = \underline{\quad}$

32)  $7 \times 4 = \underline{\quad}$

33)  $0 \times 5 = \underline{\quad}$

34)  $6 \times 10 = \underline{\quad}$

35)  $8 \times 3 = \underline{\quad}$

36)  $4 \times 8 = \underline{\quad}$

37)  $9 \times 5 = \underline{\quad}$

38)  $2 \times 8 = \underline{\quad}$

39)  $4 \times 9 = \underline{\quad}$

40)  $8 \times 3 = \underline{\quad}$

other

lots

eat

food

need

head

would

everyone

fox

that's